



Measure the width of each block in inches and in centimeters.



Ex(in). 1

Ex(cm). 2 - 3



1(in). _____

1(cm). _____



2(in). _____

2(cm). _____



3(in). _____

3(cm). _____



4(in). _____

4(cm). _____



5(in). _____

5(cm). _____



6(in). _____

6(cm). _____




7(in). _____

7(cm). _____



8(in). _____

8(cm). _____





9(in). _____

9(cm). _____

Answers



Measure the width of each block in inches and in centimeters.



Answers

Ex(in). 1

Ex(cm). 2 - 3

1(in). 3 1/2

1(cm). 8 - 9

2(in). 5 1/2

2(cm). 13 - 14

3(in). 5

3(cm). 12 - 13

4(in). 4 1/2

4(cm). 11 - 12

5(in). 1 1/2

5(cm). 3 - 4

6(in). 4

6(cm). 10 - 11

7(in). 2

7(cm). 5 - 6

8(in). 3

8(cm). 7 - 8

9(in). 0 1/2

9(cm). 1 - 2